

Name:

Enrolment No:



UNIVERSITY OF PETROLEUM AND ENERGY STUDIES  
End Semester Examination, December 2018

Programme Name: B.Tech. (CSE), All Specializations  
Course Name : Discrete Mathematical Structures  
Course Code : CSEG2006  
Nos. of page(s) : 3

Semester : III  
Time : 03 hrs  
Max. Marks : 100

Instructions: Attempt all the questions.

SECTION A

S. No.		Marks	CO
Q1.	Determine whether the function $T: \mathbb{R}^2 \rightarrow \mathbb{R}^2$ is linear transformation. If yes, prove it; if not, provide a counterexample to one of the properties: $T \begin{bmatrix} x \\ y \end{bmatrix} = \begin{bmatrix} x+y \\ y \end{bmatrix}$	[4]	CO3
Q2.	Discuss the necessary and sufficient condition for Euler circuit with suitable example.	[4]	CO4
Q3.	Apply Havel-Hakimi algorithm and determine whether each of these sequences is graphic. For those that are, draw a graph having the given degree sequence. a) 3,3,3,3,2 b) 1,1,1,1,1	[4]	CO4
Q4.	Consider the following relation R on Z, determine whether the relation is reflexive, symmetric or transitive, and specify the equivalence classes if R is an equivalence relation on Z: $(a, b) \in R$ if a + b is odd	[4]	CO1
Q5.	Prove that if n is an integer and $3n+2$ is even, then n is even using a proof by contradiction.	[4]	CO1

SECTION B

Q6.	Let $V = \mathbb{R}^2$ , and let $u, v \in V$ such that $u = (u_1, u_2)$ and $v = (v_1, v_2)$ . Define addition component-wise, that is $u+v = (u_1+v_1, u_2+v_2)$ and define scalar multiplication by scalar a to be $au = (au_1, 0)$ . Determine whether or not this set under these operations is a vector space.	[8]	CO3
-----	--	-----	-----

or

Sketch the image of the rectangle with vertices (0, 0), (1, 0), (1, 2), and (0, 2) under

- (a) A reflection about the x-axis
- (b) A reflection about the y-axis
- (c) A compression of factor  $k=1/4$  in the y-direction
- (d) An expansion of factor  $k=2$  in the x-direction
- (e) A shear of factor  $k=3$  in the x-direction

CO3

(f) A shear of factor  $k=2$  in the  $y$ -direction

Q7. Consider a complete undirected graph with vertex set  $\{0, 1, 2, 3, 4\}$ . Entry  $W_{ij}$  in the matrix  $W$  below is the weight of the edge  $\{i, j\}$ . What is the minimum possible weight of a spanning tree  $T$  in this graph such that vertex 0 is a leaf node in the tree  $T$ ?

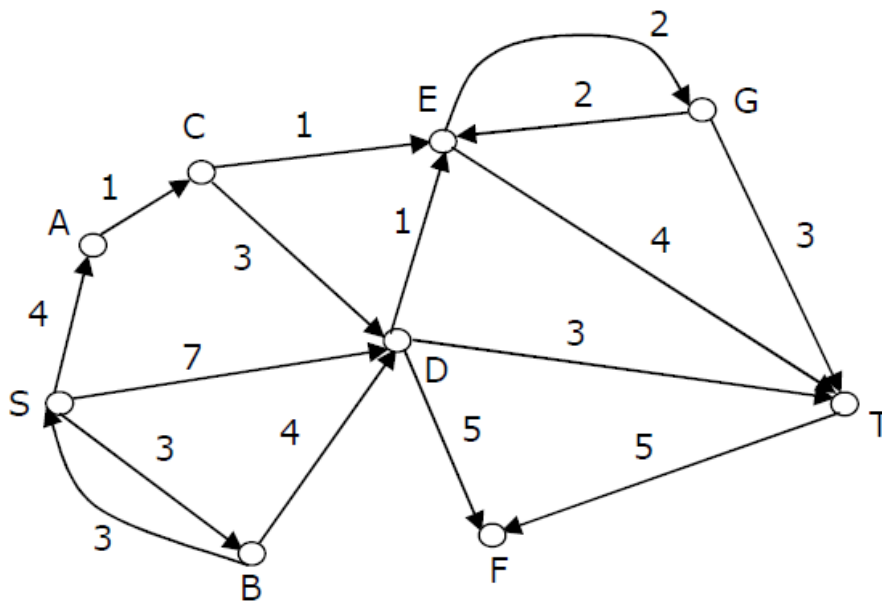
CO5

$$W = \begin{pmatrix} 0 & 1 & 8 & 1 & 4 \\ 1 & 0 & 12 & 4 & 9 \\ 8 & 12 & 0 & 7 & 3 \\ 1 & 4 & 7 & 0 & 2 \\ 4 & 9 & 3 & 2 & 0 \end{pmatrix}$$

or

Consider the directed graph shown in the figure below. There are multiple shortest paths between vertices  $S$  and  $T$ . Which one will be reported by Dijkstra's shortest path algorithm? Assume that, in any iteration, the shortest path to a vertex  $v$  is updated only when a strictly shorter path to  $v$  is discovered.

CO5



[8]

Q8. Calculate the chromatic polynomial of cyclic graph  $C_4$  using deletion-contraction (decomposition) theorem.

[8]

CO5

Q9. Solve the following recurrence relation.

$$a_n + 4a_{n-1} + 4a_{n-2} = 2^n + n^2 + 5$$

[8]

CO2

Q10. (i) Given any two sets  $A$  and  $B$ , is it true that the set  $A-B$  is always equal to the intersection of  $A$  and the complement of  $B$ . If true, prove it. If not, give a counter

[8]

CO1

example.

(ii) Apply the distributive laws of set operations to prove that the set  $(X \cup Y) - Z$  is always equal to the set  $(X - Z) \cup (Y - Z)$  for any sets  $X$ ,  $Y$ , and  $Z$ .

### SECTION-C

- Q11. Determine whether  $T_1 \circ T_2 = T_2 \circ T_1$  CO3
- (a)  $T_1: \mathbb{R}^2 \rightarrow \mathbb{R}^2$  is the orthogonal projection on the y-axis, and  $T_2: \mathbb{R}^2 \rightarrow \mathbb{R}^2$  is the orthogonal projection on the x-axis.
- (b)  $T_1: \mathbb{R}^2 \rightarrow \mathbb{R}^2$  is the clockwise rotation through an angle  $\alpha_1$ , and  $T_2: \mathbb{R}^2 \rightarrow \mathbb{R}^2$  is the anticlockwise rotation through an angle  $\alpha_2$ . [20]
- (c)  $T_1: \mathbb{R}^2 \rightarrow \mathbb{R}^2$  is the orthogonal projection on the y-axis, and  $T_2: \mathbb{R}^2 \rightarrow \mathbb{R}^2$  is the rotation through an angle  $\alpha$ .
- Q12. Prove the following: CO5
- (a) The graph  $K_5$  is not planar.
- (b) The graph  $K_{3,3}$  is not planar.
- (c) Let  $G$  be a simple undirected planar graph on 10 vertices with 15 edges. If  $G$  is a connected graph, then the number of bounded faces in any embedding of  $G$  on the plane is equal to 6. [20]
- (d) The graph  $K_4$  is planar.

**or**

Prove the Euler's theorem for connected planar graph with  $n$  vertices,  $e$  edges and  $r$  regions. CO5

CONFIDENTIAL

H

<b>Name of Examination</b> <small>(Please tick, symbol is given)</small>	:	MID		END	H	SUPPLE	
<b>Name of the School</b> <small>(Please tick, symbol is given)</small>	:	SOE	H	SOCS		SOP	
<b>Programme</b>	:	B.Tech. (CSE)					
<b>Semester</b>	:	III					
<b>Name of the Course</b>	:	Discrete Mathematical Structures					
<b>Course Code</b>	:	CSEG2006					
<b>Name of Question Paper Setter</b>	:	Dr. Shamik Tiwari					
<b>Employee Code</b>	:	40001641					
<b>Mobile &amp; Extension</b>	:	9509041102					
<b>Note: Please mention additional Stationery to be provided, during examination such as Table/Graph Sheet etc. else mention "NOT APPLICABLE":</b>							
<b>FOR SRE DEPARTMENT</b>							
<b>Date of Examination</b>	:						
<b>Time of Examination</b>	:						
<b>No. of Copies (for Print)</b>	:						

**Note: - Pl. start your question paper from next page**

**Name:**

**Enrolment No:**



**UNIVERSITY OF PETROLEUM AND ENERGY STUDIES**  
**End Semester Examination, December 2018**

**Programme Name:** B.Tech. (CSE), All Specializations  
**Course Name :** Discrete Mathematical Structures  
**Course Code :** CSEG2006  
**Nos. of page(s) :** 3

**Semester :** III  
**Time :** 03 hrs  
**Max. Marks :** 100

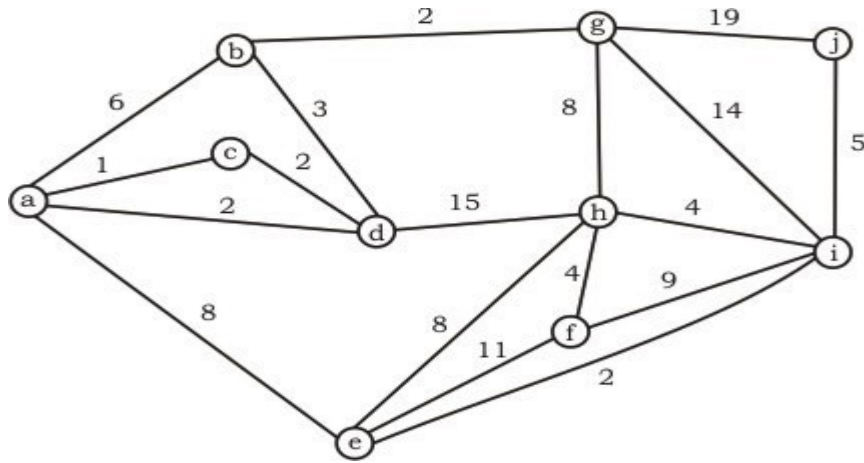
Instructions: Attempt all the questions.

**SECTION A**

- |  | <b>Marks</b> | <b>CO</b> |
|--|--------------|-----------|
| Q1. Determine whether the function $T: \mathbb{R}^2 \rightarrow \mathbb{R}^2$ is linear transformation. If yes, prove it; if not, provide a counterexample to one of the properties:   | [4]          | CO3       |
| $T \begin{bmatrix} x \\ y \end{bmatrix} = \begin{bmatrix} x^2 \\ y^2 \end{bmatrix}$  |              |           |
| Q2. A sequence $d_1, d_2, \dots, d_n$ is called graphic if it is the degree sequence of a simple graph. Determine whether each of these sequences is graphic. For those that are, draw a graph having the given degree sequence. | [4]          | CO4       |
| a) 5, 4, 3, 2, 1, 0  |              |           |
| b) 6, 5, 4, 3, 2, 1  |              |           |
| Q3. Prove undirected graph has even number of vertices with odd degree.  | [4]          | CO4       |
| Q4. Consider the following relation R on Z, determine whether the relation is reflexive, symmetric or transitive, and specify the equivalence classes if R is an equivalence relation on Z:                                      | [4]          | CO1       |
| (a, b) ∈ R if a + b is even  |              |           |
| Q5. Prove that $\sqrt{2}$ is irrational by giving a proof by contradiction.  | [4]          | CO1       |

**SECTION B**

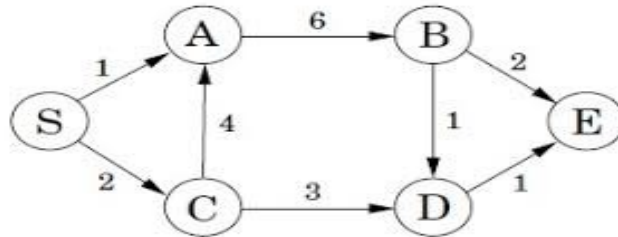
- |   |     |     |
|---|-----|-----|
| Q6. Let $V = \mathbb{R}^2$ , and let $u, v, w \in V$ such that $u = (u_1, u_2)$ and $v = (v_1, v_2)$ . Define addition as $u+v = (u_1v_1, u_2v_2)$ and define scalar multiplication by scalar a to be $au = (au_1, au_2+1)$ . Determine whether or not this set under these operations is a vector space. |     | CO3 |
| <b>or</b>   |     |     |
| Find the standard matrix for the stated composition of linear operators on $\mathbb{R}^2$   | [8] | CO3 |
| (a) A rotation of $90^\circ$ , followed by a reflection about line $y=x$ .  |     |     |
| (b) An orthogonal projection on the y-axis, followed by a contraction with factor $k=0.5$ .   |     |     |
| (c) A reflection about the x-axis, followed by a dilation with factor $k=3$ .   |     |     |
| Q7. What is the weight of a minimum spanning tree of the following graph? Apply the Kruskal's algorithm.  | [8] | CO5 |



or

Using Dijkstra's Algorithm, find out the shortest distance from the source vertex 'S' to the rest of the vertices in the given graph. Also, write the order in which all the vertices of the graph are visited.

CO5



Q8. Solve the following recurrence relation

$$a_{n+2} - 2a_{n+1} + a_n = 2^n + 5$$

$$a_0 = 2, a_1 = 1$$

[8]

CO2

Q9. Let  $f, g$  and  $h$  be functions from  $\mathbb{N}$  to  $\mathbb{N}$  defined by

$$f(x) = x, g(x) = x^2 + 1 \text{ and } h(x) = 2x + 1 \text{ for every } x \in \mathbb{N}.$$

a) Determine whether each function is one-to-one or onto.

b) Find  $h \circ (g \circ f)$  and  $(h \circ g) \circ f$ , and verify the Associative law for composition of functions.

[8]

CO1

Q10. Find the chromatic number for the following graphs.

- $K_3$
- $C_5$
- $C_3$
- $W_3$
- $W_4$
- $K_{3,3}$
- $Q_2$
- Tree

[8]

CO5

### SECTION-C

Q11. Determine whether  $T_1 \circ T_2 = T_2 \circ T_1$

- (a)  $T_1: \mathbb{R}^2 \rightarrow \mathbb{R}^2$  is the orthogonal projection on the x-axis, and  $T_2: \mathbb{R}^2 \rightarrow \mathbb{R}^2$  is the orthogonal projection on the y-axis.
- (b)  $T_1: \mathbb{R}^2 \rightarrow \mathbb{R}^2$  is the rotation through an angle  $\alpha_1$ , and  $T_2: \mathbb{R}^2 \rightarrow \mathbb{R}^2$  is the rotation through an angle  $\alpha_2$ .
- (c)  $T_1: \mathbb{R}^2 \rightarrow \mathbb{R}^2$  is the orthogonal projection on the x-axis, and  $T_2: \mathbb{R}^2 \rightarrow \mathbb{R}^2$  is the rotation through an angle  $\alpha$ .

[20] CO3

Q12. Let  $G$  be a connected planar graph with  $p$  vertices,  $q$  edges, and  $r$  regions. Then prove that  
 $p - q + r = 2$ .

CO5

or

Write short note on the following:

- (a) Kuratowski's non-planar graphs
- (b) Chromatic Polynomial
- (c) Chromatic Polynomial using Decomposition Theorem
- (d) Cut set

[20] CO5